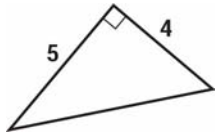


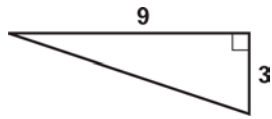
Lesson 1 Worksheet 3 Pythagorean Theorem

Use the Pythagorean Theorem to find the missing side. Please show your work on this paper.
Round your answer to 2 decimal places.

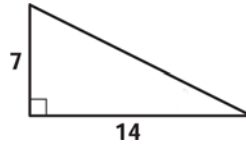
1.



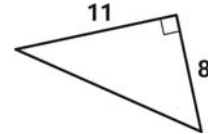
2.



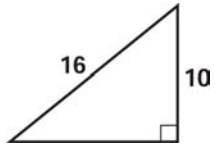
3.



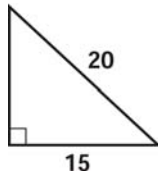
4.



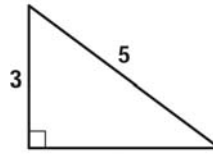
5.



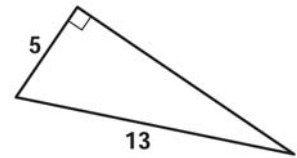
6.



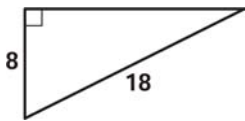
7.



8.



9.



10.

